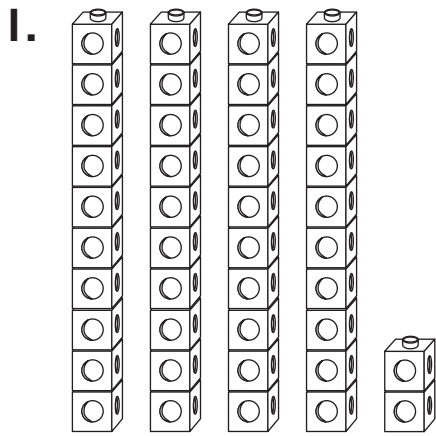
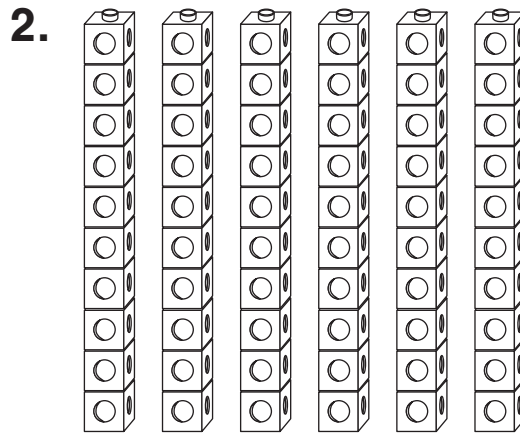


# Modeling Numbers in Different Ways

What is the number?



\_\_\_\_\_



\_\_\_\_\_



\_\_\_\_\_



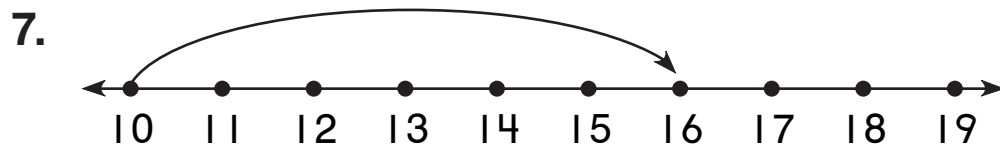
\_\_\_\_\_

5.  $10 + 10 + 6$

\_\_\_\_\_

6.  $20 + 10 + 10 + 2$

\_\_\_\_\_



\_\_\_\_\_