




# Investigating Probability

Is it *possible* or *impossible*?


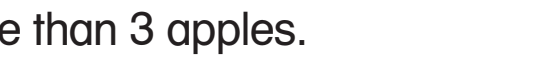

Draw lines to match.

1. It will rain tomorrow.  possible
  2. The school lunch will have milk.  impossible
  3. A cow will jump over the moon.  impossible
- 

4. Draw a picture to show an *impossible* event.
- 

Is it *certain*, *likely*, or *unlikely*?

Draw lines to match.

5. A penny is worth 1¢.  certain
6. One apple costs more than 3 apples.  likely
7. Three apples cost more than 1 apple.  unlikely