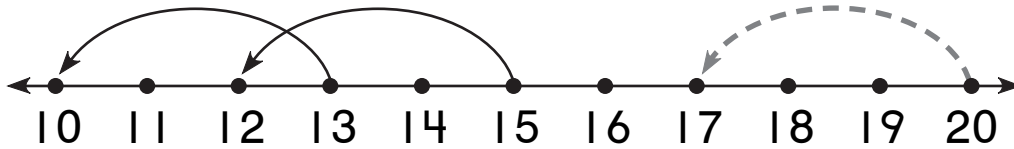


Identifying Rules with Larger Numbers

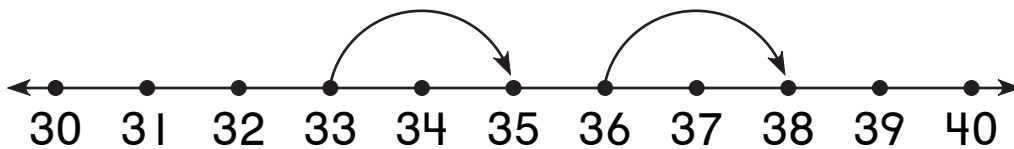
Draw the missing jumps.
Complete each table.

1.



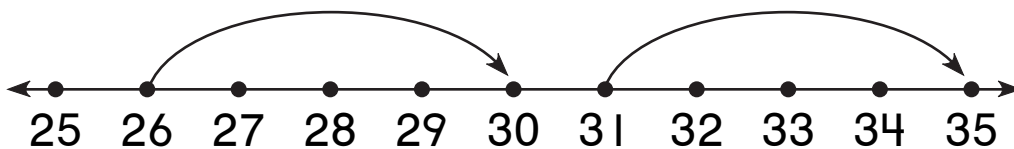
Start	13	15	20	17	
Land	10	12	17		16

2.



Start	33	36	30		38
Land	35	38		37	

3.



Start	26	31	27		30
Land	30	35		33	