

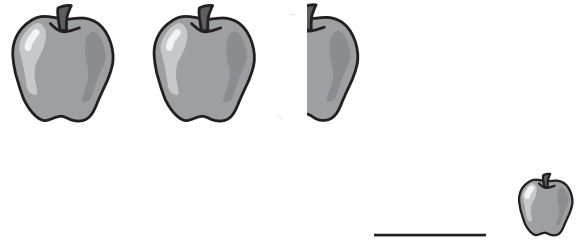
# Wholes and Halves

How many apples are there?

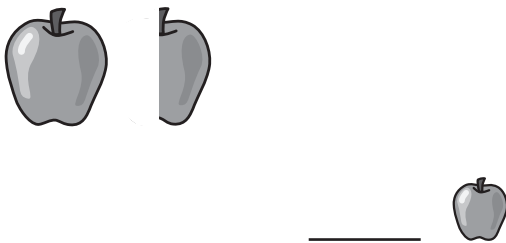
1.



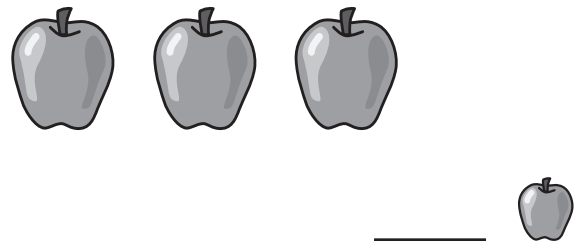
2.




3.



4.



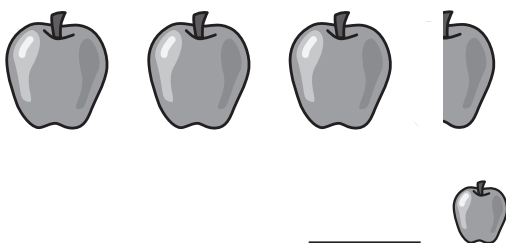
5.



6.



7.



8.



9. Write the numbers above in order from smallest to largest.

0    \_\_\_\_\_    \_\_\_\_\_    \_\_\_\_\_    \_\_\_\_\_    \_\_\_\_\_    \_\_\_\_\_    \_\_\_\_\_