


Making Fact Families

What is the fact family?

1.




$$\begin{array}{r} 3 + 9 = 12 \\ \hline \end{array}$$

$$\begin{array}{r} + \quad = \\ \hline \end{array}$$

$$\begin{array}{r} 12 - \quad = 9 \\ \hline \end{array}$$

$$\begin{array}{r} 12 - \quad = \\ \hline \end{array}$$

2.




$$\begin{array}{r} + \quad = \\ \hline \end{array}$$

$$\begin{array}{r} + \quad = \\ \hline \end{array}$$

$$\begin{array}{r} - \quad = \\ \hline \end{array}$$

$$\begin{array}{r} - \quad = \\ \hline \end{array}$$

3.



$$\begin{array}{r} \\ + \\ \hline \\ \end{array}$$

$$\begin{array}{r} \\ + \\ \hline \\ \end{array}$$

$$\begin{array}{r} \\ - \\ \hline \\ \end{array}$$

$$\begin{array}{r} \\ - \\ \hline \\ \end{array}$$