
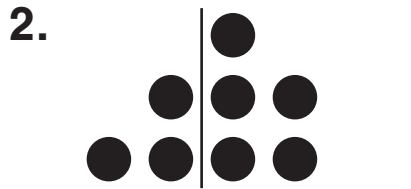


Fact Families and Stair-Step Numbers


What is the fact family?




$$\begin{array}{r} 3 + 2 = 5 \\ \hline 2 + 3 = \\ \hline 5 - 2 = \\ \hline 5 - 3 = \end{array}$$




$$\begin{array}{r} 3 + 5 = \\ \hline + = \\ \hline - = \\ \hline - = \end{array}$$



$$\begin{array}{r} 2 + 4 = \\ \hline + = \\ \hline - = \\ \hline - = \end{array}$$



$$\begin{array}{r} 2 + 5 = \\ \hline + = \\ \hline - = \\ \hline - = \end{array}$$



$$\begin{array}{r} 8 + 1 = \\ \hline + = \\ \hline - = \\ \hline - = \end{array}$$