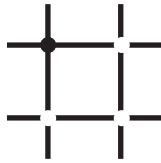


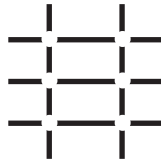
Exploring Lines and Intersections

Draw dots to show where the lines intersect.

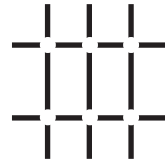
1.



2.

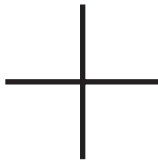


3.



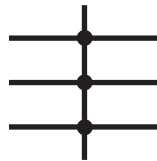
Complete each table.

4.



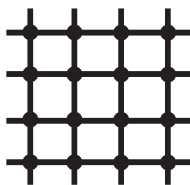
—	⋮

5.



—	

6.



—	

7.



—	