





Exploring Three-Dimensional Figures

sphere 	cylinder 
rectangular prism 	cone 


What is the shape of each object?

1.


sphere



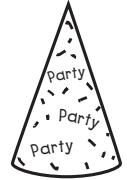
2.




3.



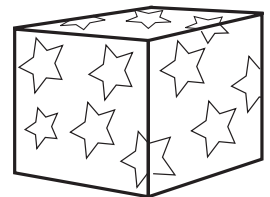
4.



5.



6.



7. How are a cylinder and a sphere different?
