


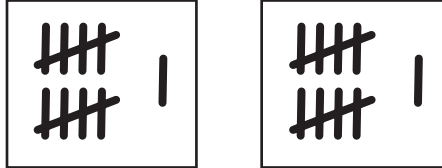
Comparing Groups

How many are there?

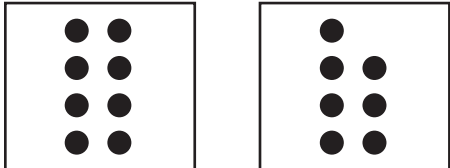
Write $<$, $>$, or $=$.

1. 


\bigcirc

2. 

\bigcirc

3. 

\bigcirc

4. 

\bigcirc

What is missing?

5. $<$ 2

6. 15 $>$

7. 6 \bigcirc 8

8. 10 \bigcirc 10

9. $2 + 4$ \bigcirc $2 + 7$

10. $9 + 3$ \bigcirc $3 + 5$