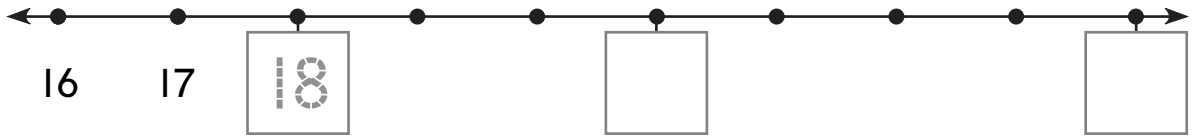


Comparing Numbers and Temperatures

What numbers are missing?

Write $<$, $>$, or $=$.

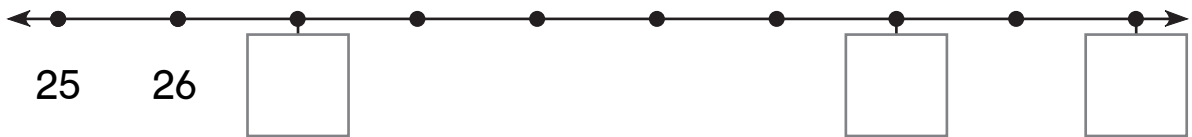
1.



21 $<$ 25

18 \bigcirc 21

2.

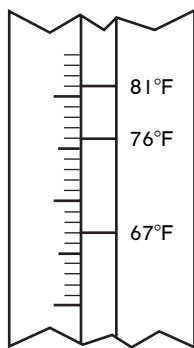


34 \bigcirc 27

32 \bigcirc 34

Write $>$ or $<$.

3.

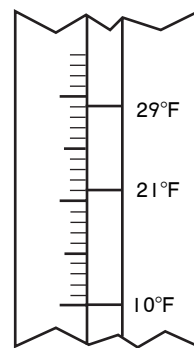


67°F \bigcirc 76°F

76°F \bigcirc 81°F

81°F \bigcirc 67°F

4.



29°F \bigcirc 10°F

21°F \bigcirc 10°F

21°F \bigcirc 29°F