

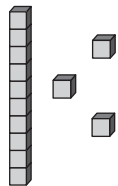


Using Place Value to Compare Numbers



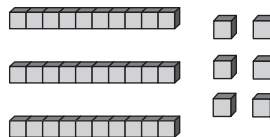
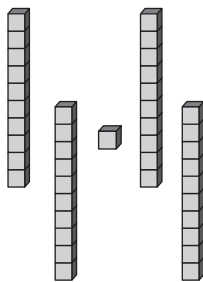
What numbers are shown?

Write $<$, $>$, or $=$.

1.



2.



Write $>$, $<$, or $=$.

3. 64 ○ 64

4. 43 ○ 47

5. 81 ○ 18

6. 35 ○ 53

7. 99 ○ 99

8. 72 ○ 27