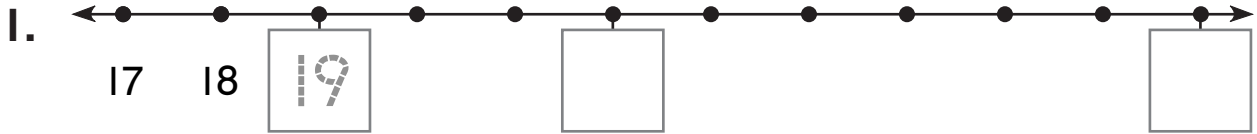


Ordering Numbers

What is missing?

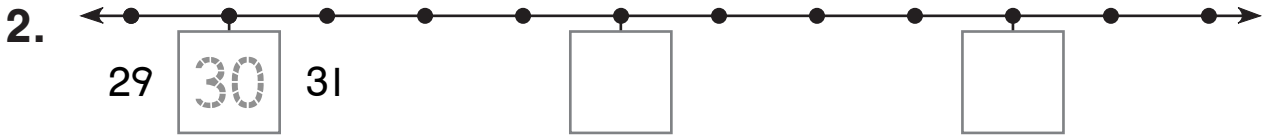
Write $<$, $>$, or $=$.



19 ○ 28

28 ○ 22

22 ○ 19



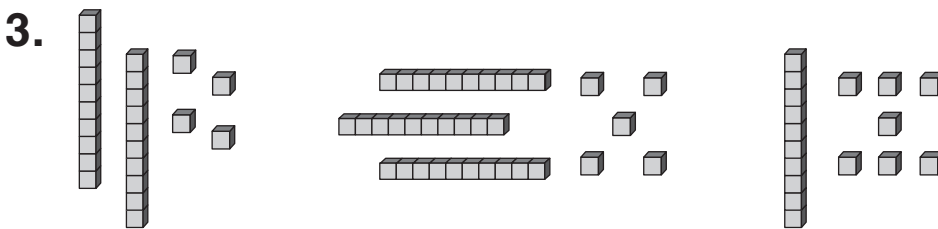
31 ○ 30

34 ○ 38

29 ○ 34

Write the numbers.

Then order the numbers.



24

□

□

□ < □ < □