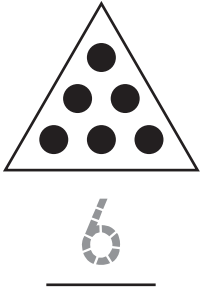


# Combining Triangular Numbers

How many dots are in the triangle?


1.




2.



3.




4.



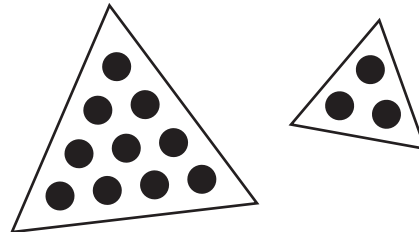
What is the fact family?

5.



$$\begin{array}{r} + \quad = \\ \hline \\ + \quad = \\ \hline \\ - \quad = \\ \hline \\ - \quad = \\ \hline \end{array}$$

6.



$$\begin{array}{r} + \quad = \\ \hline \\ + \quad = \\ \hline \\ - \quad = \\ \hline \\ - \quad = \\ \hline \end{array}$$