




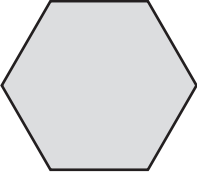





Skip-Counting with Money

Pattern Block Prices



					
1¢	2¢	3¢	4¢	5¢	6¢



How much will the blocks cost?

<p>1.  4</p> <p>_____¢</p>	<p>2.  3</p> <p>_____¢</p>	<p>3.  5</p> <p>_____¢</p>
---	---	---

4. 8  and 5  _____¢

5. 2  and 4  _____¢

6. Emily bought half as many  as  .
She spent 12¢.
How many did she buy?

_____  and _____ 

7. Henry bought 5 blocks.
They were all the same.
They cost 25¢.
Draw the type of block.