

Algebra

What is missing in each pattern?

1.




×	× × ×	× × × × × ×		× × × × × × × × ×
1	3			

2.

• •	• • • •	• • • • • •		

Geometry

How many are there?

3.  _____
4.  _____
5.  _____

