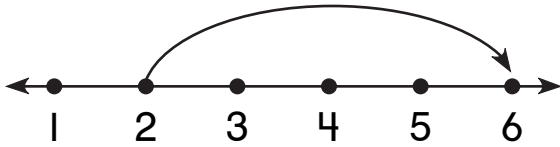



# Number and Operations

What is missing?

1.

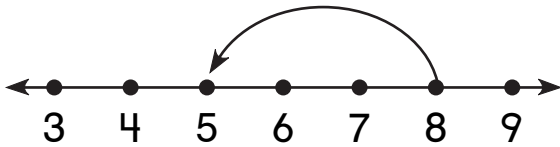


2

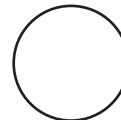


6

2.



8



5

## Problem Solving

Which does not belong?

3.



4.

