

Number and Operations

Which is one less?

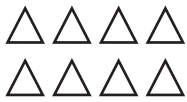

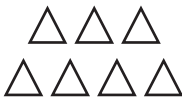
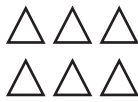
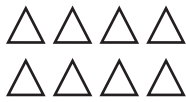
1.

				
---	---	---	--	---

2.

				
---	---	---	--	---

3.

				
--	--	--	---	--

4.

4	2	3	5	4
----------	----------	----------	----------	----------

5.

7	6	5	4	7
----------	----------	----------	----------	----------

6.

10	10	9	12	11
-----------	-----------	----------	-----------	-----------