



Measurement

What time is it?


1.




2.



3.



4.



Geometry

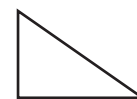
How many sides and corners are there?

5.



_____ sides _____ corners

6.



_____ sides _____ corners