


Number and Operations

What is the value?

1.  _____ ¢


2.  _____ ¢


3.  _____ ¢


4.  _____ ¢

Geometry

What is the name of each figure?

5.  _____ rectangle

6.  _____ circle

7.  _____ triangle