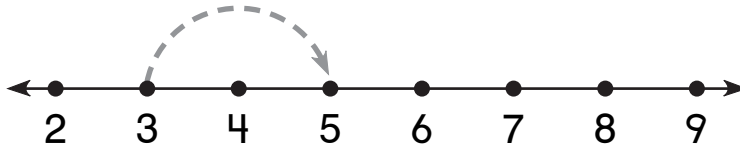


Number and Operations

What is missing?

1.



3

+ 2

2.



4

5

3.




0

+ 5


Measurement

What time is it?

4.



3 hours later



:

: