

Number and Operations

What number is missing?

1.

$$2 + \underline{\quad} = 9$$

2.

$$\underline{\quad} + 4 = 7$$

3.

$$\underline{\quad} + 5 = 10$$


4.

$$8 + \underline{\quad} = 8$$


Measurement

What time is it?


5.



6.



7.



8.

