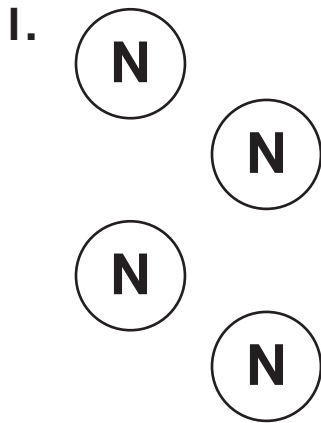


# Number and Operations

**N** is for nickel,  
worth 5¢.


**P** is for penny,  
worth 1¢.

How many coins are there? What is the value?



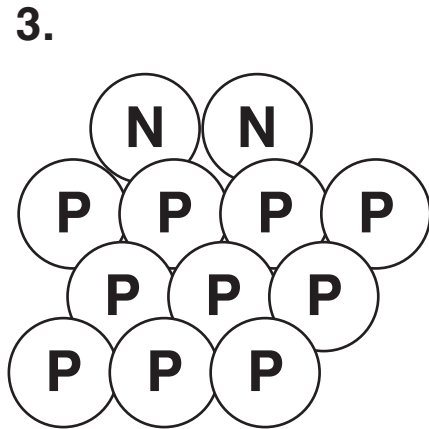
\_\_\_\_\_ coins

\_\_\_\_\_ ¢



\_\_\_\_\_ coins

\_\_\_\_\_ ¢



\_\_\_\_\_ coins

\_\_\_\_\_ ¢

# Algebra

What numbers are missing?

4. 1, 3, 1, 3, 1, \_\_\_\_\_, \_\_\_\_\_, \_\_\_\_\_

5. 5, 6, \_\_\_\_\_, \_\_\_\_\_, 9, \_\_\_\_\_, 11, 12

6. \_\_\_\_\_, 4, 6, 8, \_\_\_\_\_, \_\_\_\_\_, 14

7. 1, 3, \_\_\_\_\_, 7, \_\_\_\_\_, 11, 13, \_\_\_\_\_