



Measurement

What is missing?

1.




3 hours
earlier




_____ : _____

_____ : _____

2.



6 hours
later



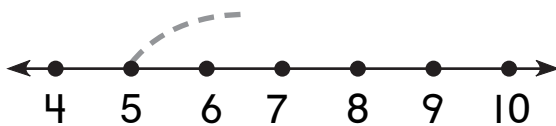
_____ : _____

8:00


Number and Operations

What is missing?

3.

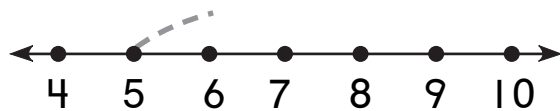


5

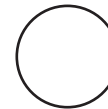


8

4.



5



10