


Measurement


What time is it?

1.




_____ : _____

2.




_____ : _____

3.



_____ : _____

4.



_____ : _____

Number and Operations

How many coins are there? What is the value?

5.



_____ coins

_____ ¢

6.



_____ coins

_____ ¢