

# Number and Operations

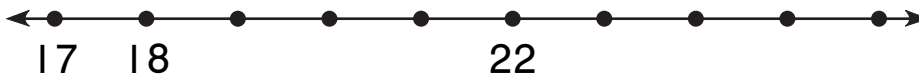
Draw the jump. Complete the number sentence.

1.



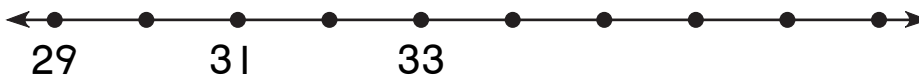
$$\boxed{40} + \boxed{\phantom{00}} = \boxed{45}$$

2.



$$\boxed{\phantom{00}} + \boxed{6} = \boxed{26}$$

3.




$$\boxed{30} + \boxed{\phantom{00}} = \boxed{34}$$

# Measurement


What time is it?

4.



\_\_\_\_\_ :

5.



\_\_\_\_\_ :