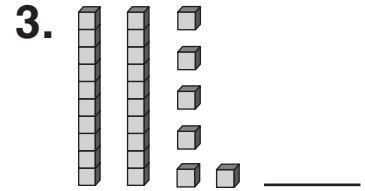
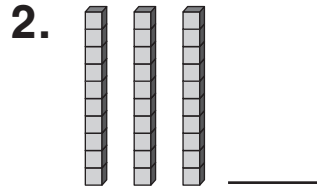
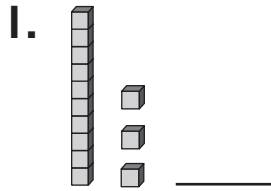


Number and Operations

What is the number?



What number is missing?

4. $2 + \square = 8$

5. $4 + \square = 7$

6. $\square + 5 = 9$

7. $\square + 6 = 12$

8. $9 + 0 = \square$

9. $7 + 4 = \square$

10. $5 + 5 + 2 = \square$