


# Measurement


What time is it?

1.




\_\_\_\_\_ :

2.




\_\_\_\_\_ :

3.




\_\_\_\_\_ :

4.




\_\_\_\_\_ :

5.



\_\_\_\_\_ :

6.



\_\_\_\_\_ :

# Number and Operations

What numbers are missing?

7.

4		5
3		
	2	9

8.

2		5
	5	
4	8	