

# Number and Operations

Complete each fact family.

1.  $3 + 5 = \underline{\quad}$

$\underline{\quad} + 3 = 8$

$8 - 5 = \underline{\quad}$

$8 - \underline{\quad} = 5$

2.  $7 + 2 = \underline{\quad}$

$\underline{\quad} + 7 = 9$

$9 - 7 = \underline{\quad}$

$9 - \underline{\quad} = 2$

3.  $\underline{\quad} + 6 = 8$

$6 + \underline{\quad} = 8$

$8 - \underline{\quad} = 2$

$\underline{\quad} - 2 = 6$

4.  $\underline{\quad} + 7 = 8$

$7 + \underline{\quad} = 8$

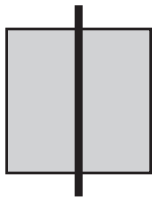
$8 - \underline{\quad} = 7$

$\underline{\quad} - 7 = 1$

# Geometry

Is it a mirror line?

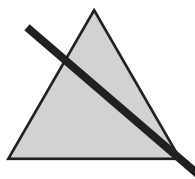
5.



yes

no

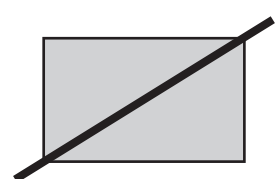
6.



yes

no

7.



yes

no