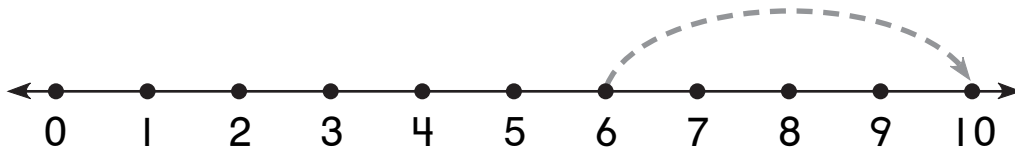


Number and Operations

What is missing?

Draw an arrow to show the jump.

1.

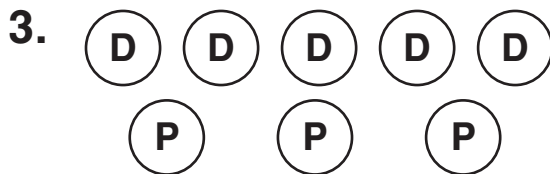


2.




How many coins are there?

What is the value?



_____ coins _____ ¢



_____ coins _____ ¢