

Number and Operations

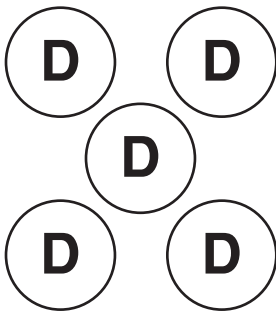
D is for dime, worth 10¢.

N is for nickel, worth 5¢.

P is for penny, worth 1¢.

How many coins are there? What is the value?


1.



_____ coins

_____¢


2.



_____ coins

_____¢

3.



_____ coins

_____¢

What numbers are missing?

4. $\boxed{24} = \boxed{} + \boxed{4}$

5. $\boxed{} + \boxed{8} = \boxed{18}$

6. $\boxed{37} = \boxed{30} + \boxed{}$

7. $\boxed{20} + \boxed{} = \boxed{23}$