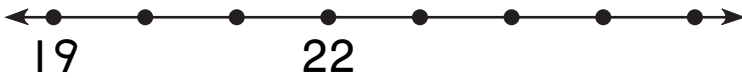



Number and Operations

Draw the number line jump.
Write the missing number.

1.



24

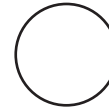


20

2.



10




13

Measurement

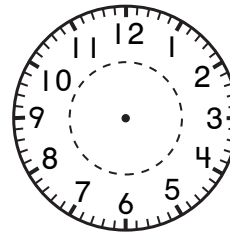
Write the time or draw the clock hands.

3.



:

4.



3:30