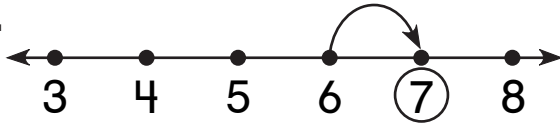


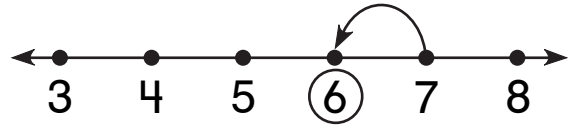
Number and Operations

What is missing?

1.

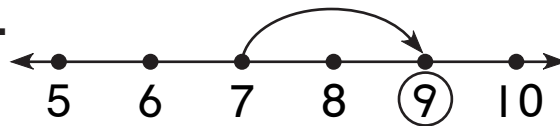


$$\boxed{6} + \boxed{1} = \boxed{7}$$

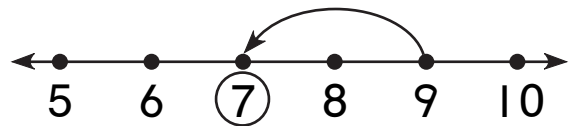


$$\boxed{} - \boxed{} = \boxed{}$$

2.

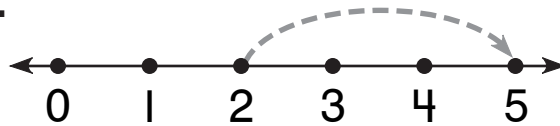


$$\boxed{} + \boxed{} = \boxed{}$$

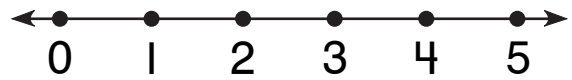


$$\boxed{} - \boxed{} = \boxed{}$$

3.



$$\boxed{2} + \boxed{3} = \boxed{5}$$




$$\boxed{5} - \boxed{3} = \boxed{}$$

Measurement


What time is it?

4.



$\boxed{} : \boxed{}$

5.



$\boxed{} : \boxed{}$