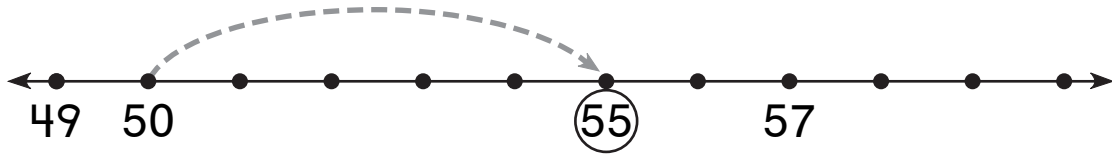


# Number and Operations

What is missing?

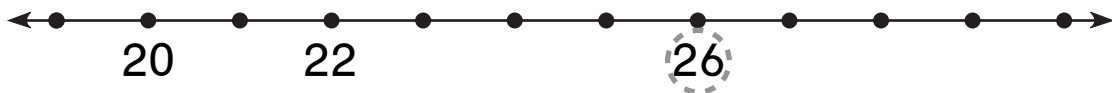
1.



$$\boxed{50} + \boxed{5} = \boxed{55}$$

$$\boxed{5} + \boxed{50} = \boxed{55}$$

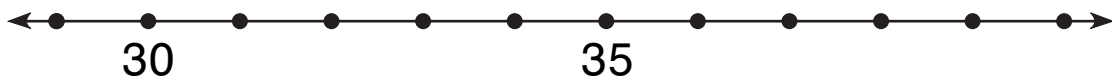
2.



$$\boxed{20} + \boxed{\phantom{00}} = \boxed{26}$$

$$\boxed{\phantom{00}} + \boxed{20} = \boxed{26}$$

3.




$$\boxed{4} + \boxed{\phantom{00}} = \boxed{34}$$

$$\boxed{30} + \boxed{\phantom{00}} = \boxed{34}$$

# Measurement


What time is it?

4.



:

5.



: