



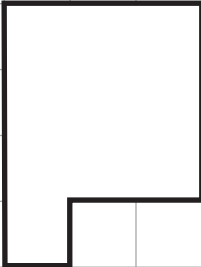






Geometry

I. How many are in each figure?

<p>Figure A</p> 	<p>Figure B</p> 	<p>Figure C</p> 
<p>Figure D</p> 	<p>Figure E</p> 	<p>Figure F</p> 
<p>Figure G</p> 	<p>Figure H</p> 	<p>Figure I</p> 

Algebra

What numbers are missing?

2. 4, 6, 8, _____, 12, _____, 16

3. _____, 9, 11, 13, _____, 17, 19