

# Number and Operations

Draw the jump.

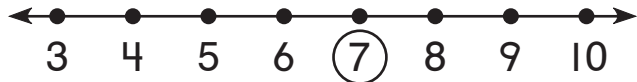
Complete the number sentence.

1.



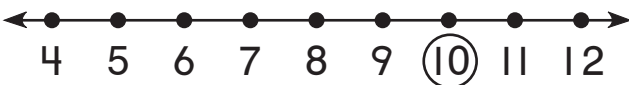
+ 3 = 9

2.



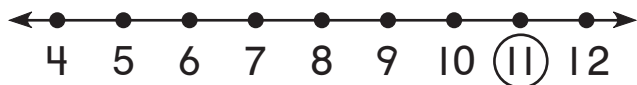
+ 2 = 7

3.



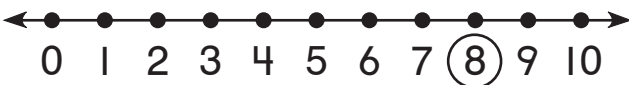
+ 4 = 10

4.



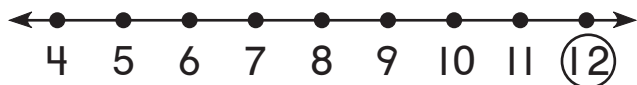
+ 1 = 11

5.



+ 6 = 8

6.



+ 5 = 12

## Data Analysis and Probability

7. How many more children have white shoes than red shoes?

\_\_\_\_\_ more children

### Colors of Children's Shoes

|       |   |   |   |   |   |   |   |
|-------|---|---|---|---|---|---|---|
| white | 😊 | 😊 | 😊 | 😊 | 😊 | 😊 | 😊 |
| blue  | 😊 | 😊 | 😊 | 😊 | 😊 |   |   |
| red   | 😊 | 😊 | 😊 |   |   |   |   |

Key: Each 😊 stands for 1 child.