



# Number and Operations


What is the fact family?

1. 

$$\begin{array}{r} 6 + 2 = 8 \\ \hline 2 + \quad = \\ \hline 8 - 6 = \\ \hline \quad - = 6 \end{array}$$

2. 

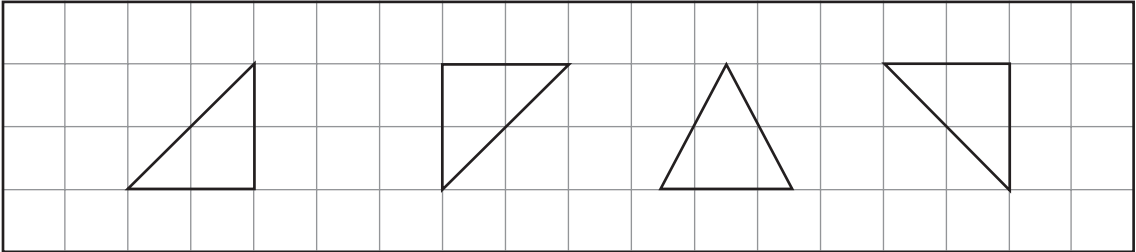
$$\begin{array}{r} + = \\ \hline + = \\ \hline - = \\ \hline - = \end{array}$$

3. 

$$\begin{array}{r} + = \\ \hline + = \\ \hline - = \\ \hline - = \end{array}$$

# Geometry

Which figure does not match?

4. 

5. 