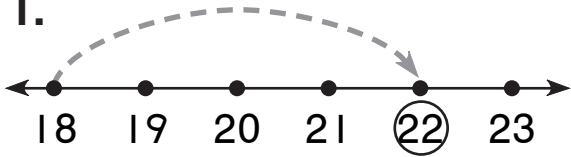


Number and Operations

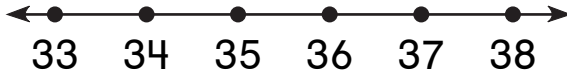
Write the missing numbers. Draw the jump.

1.



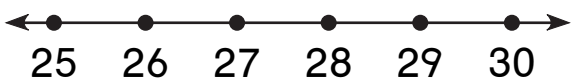
$$\boxed{18} + \boxed{4} = \boxed{22}$$

2.



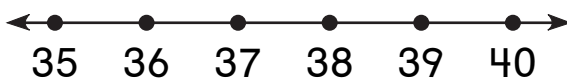
$$\boxed{} - \boxed{2} = \boxed{34}$$

3.



$$\boxed{} + \boxed{4} = \boxed{30}$$

4.

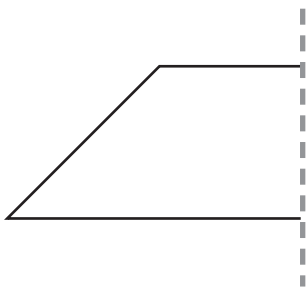


$$\boxed{40} - \boxed{} = \boxed{37}$$

Geometry

Draw the other half.

5.



6.

