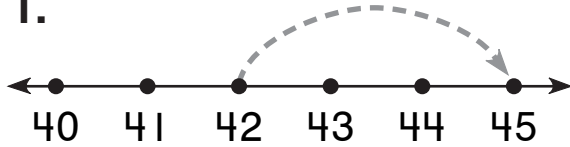


Number and Operations

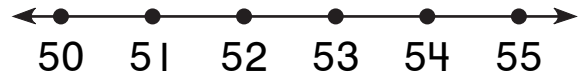
Write the missing numbers. Draw the jump.

1.



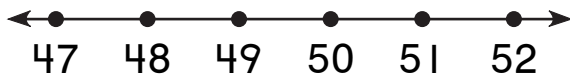
$$\boxed{42} + \boxed{3} = \boxed{}$$

2.



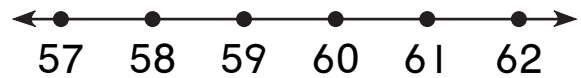
$$\boxed{55} - \boxed{4} = \boxed{}$$

3.



$$\boxed{48} + \boxed{} = \boxed{52}$$

4.



$$\boxed{62} - \boxed{5} = \boxed{}$$

Algebra

What numbers are missing?

5. 1, 3, 5, 7, _____, _____, _____

6. 2, 5, 8, 11, _____, _____, _____