



Measurement


I. Write the missing time. Draw the missing clock hands.



2 hours later
→



3 hours later
→



⌚


6:00

⌚


↓ half an hour later

↓ half an hour later


↓ half an hour later



⌚ hours later
→



⌚ hours later
→



⌚

⌚

⌚

Geometry

Draw each figure.

2. rectangle

3. square

4. triangle