


# Geometry

How many sides are there in each figure?

How many corners are there?

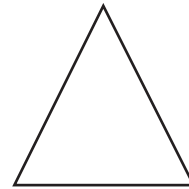
1.



\_\_\_\_\_ sides

\_\_\_\_\_ corners

2.



\_\_\_\_\_ sides

\_\_\_\_\_ corners

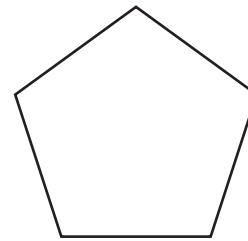
3.



\_\_\_\_\_ sides

\_\_\_\_\_ corners

4.



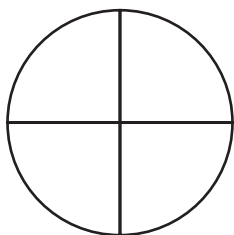
\_\_\_\_\_ sides

\_\_\_\_\_ corners

# Number and Operations

Color one half.

5.



6.

