


Number and Operations

1. What is the fact family?



$$\square + \square = \square$$

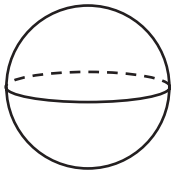
$$\square + \square = \square$$

$$\square - \square = \square$$

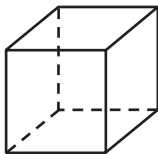
$$\square - \square = \square$$

Geometry

2. Match the figure to its name.



cube



cylinder



sphere