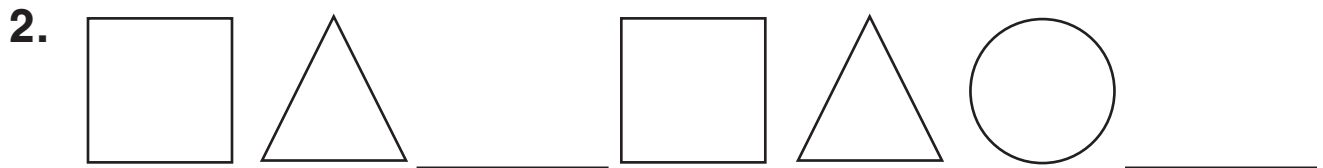


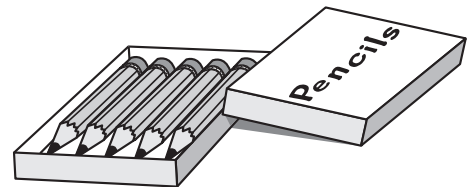
Algebra

What figures are missing?

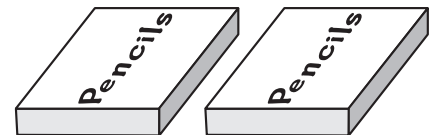


Problem Solving

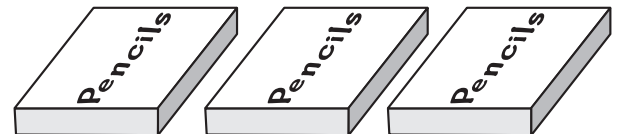
There are 5 pencils in 1 box.



3. There are _____ pencils in 2 boxes.



4. There are _____ pencils in 3 boxes.



5. There are _____ pencils in 4 boxes.

