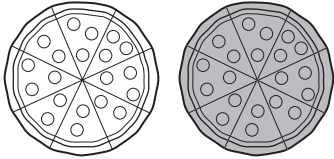



Number and Operations

Write a fraction for the shaded part.


1.



2.



3.




4.



Measurement


Write *heavier than*, *lighter than*, or *about the same as*.

5.



A is _____ 12 oz.

6.



B is _____ 12 oz.