



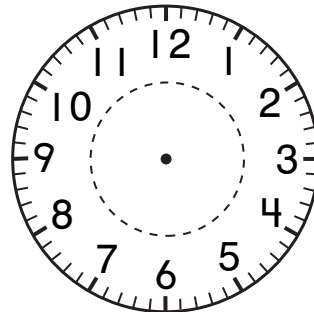

Measurement

Draw the clock hands. Show 1 hour later.

1.




2.



Number and Operations

Write the fact family.

3.




$$+ =$$

$$+ =$$

$$- =$$

$$- =$$

4.



$$+ =$$

$$+ =$$

$$- =$$

$$- =$$