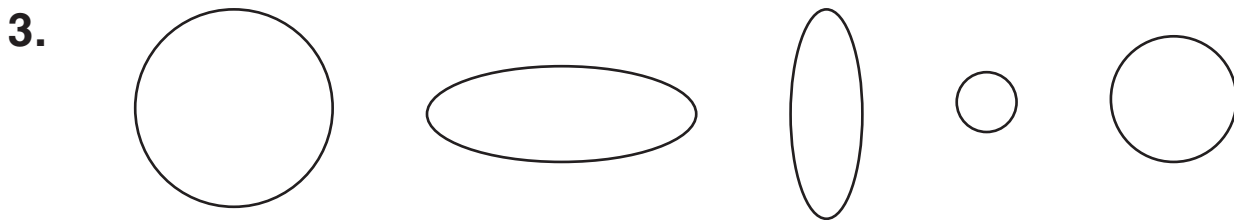
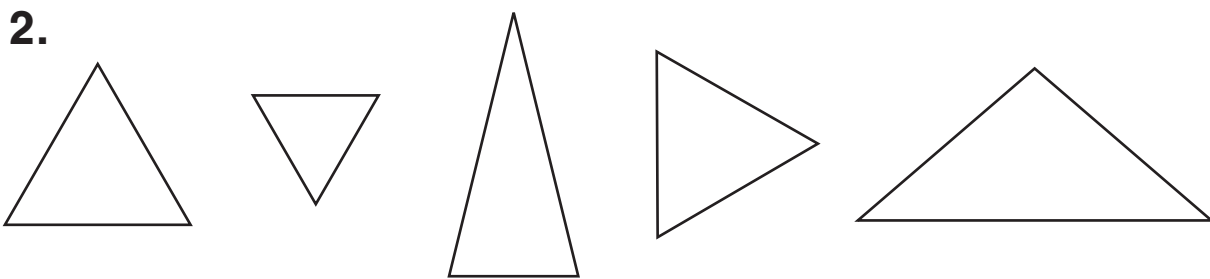
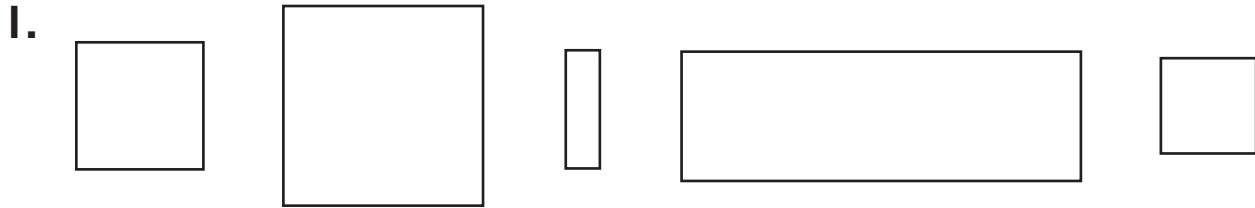


Geometry

Circle the smallest figure.
Cross out the largest figure.



Algebra

Write a number to make each comparison true.

4. $10 > \underline{\quad}$

5. $9 < \underline{\quad}$

6. $17 > \underline{\quad}$

7. $20 > \underline{\quad}$

8. $5 + 5 < \underline{\quad}$

9. $10 - 7 > \underline{\quad}$

10. $10 + 10 > \underline{\quad}$

11. $13 + 4 < \underline{\quad}$

12. $20 + 10 < \underline{\quad}$