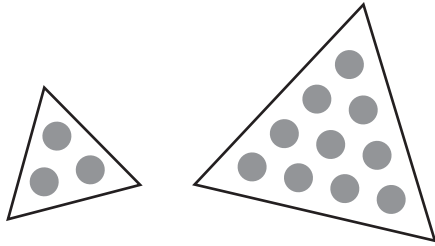


Number and Operations

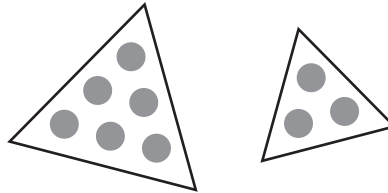
What is the fact family?

1.



+		=
+		=
-		=
-		=

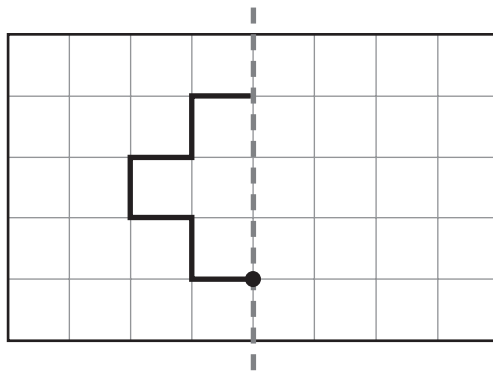
2.



+		=
+		=
-		=
-		=

Geometry

3. Start at the dot. Draw the mirror image.
Record the arrow directions.



←	↑	←	↑	→	↑	→
---	---	---	---	---	---	---

--	--	--	--	--	--	--	--