

# Algebra

Write the missing numbers. What is the rule?

1.


in	0	2	3	4	7		
out	6	8	9			16	36

The rule is \_\_\_\_\_.

# Number and Operations


How many coins are there?  
What is the value?

2.




\_\_\_\_\_ coins  
\_\_\_\_\_ ¢

3.




\_\_\_\_\_ coins  
\_\_\_\_\_ ¢

4.



\_\_\_\_\_ coins  
\_\_\_\_\_ ¢

5.



\_\_\_\_\_ coins  
\_\_\_\_\_ ¢