


Measurement


What time is it?

1.




:

2.




:

3.



:

4.

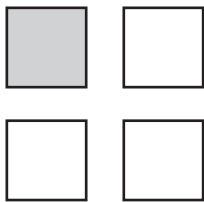


:

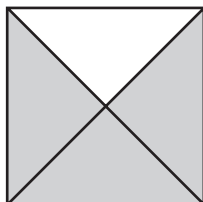
Number and Operations

Write a fraction for the shaded part.

5.



6.



7.

