

## Data Analysis and Probability

Charlie asked his classmates if they bring their lunch to school.

**Do you bring your lunch to school?**

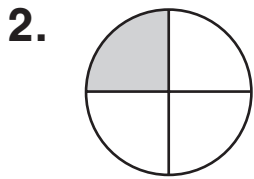
yes	no	yes
no	no	yes
yes	yes	yes
no	yes	no

1. Draw tally marks to show how many classmates bring their lunch to school.

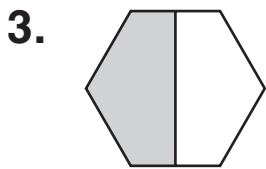
\_\_\_\_\_

## Number and Operations

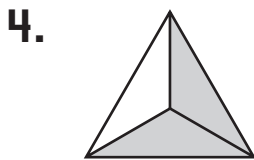
What is the fraction for the shaded part?



\_\_\_\_\_



\_\_\_\_\_



\_\_\_\_\_



\_\_\_\_\_