

Ways to Make 12 with Two Rods

Draw a line to show rods.
Write a number sentence.

--	--

$10 + 2 = 12$

--	--

--	--

--	--

--	--

--	--

--	--

--	--

--	--

--	--

--	--

--	--

--	--

--	--


















--	--

--	--

--	--

Ways to Make 12 with More than Two Rods

Draw lines to show rods.
Write a number sentence.

	$5 + 5 + 2 = 12$
	_____
	_____
	_____
	_____
	_____
	_____
	_____
	_____
	_____
	_____
	_____
	_____
	_____
	_____
	_____
	_____